




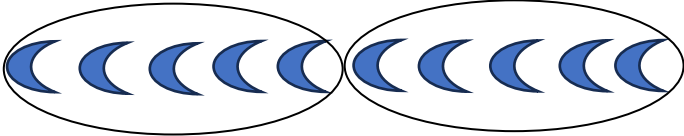




QUESTION BANK

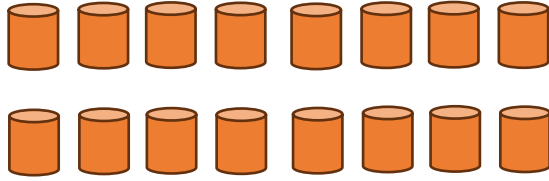
Grade 2- MATHEMATICS

Chapter 6- Time

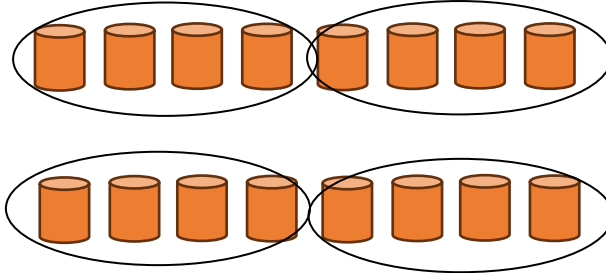
| Q.No. | Questions   | Mark |
|-------|---|------|
| 1     | <p>Put the items into equal groups by drawing circles.</p> <p>a) Group of 2 each</p>  <p>b) Group of 3 each</p>  <p>c) Group of 5 each</p>  <p><b>Answer :</b></p> <p>a) </p> <p>b) </p> <p>c) </p> |      |

2

Put the objects into group of 4 each. Then write the number of groups in the box.

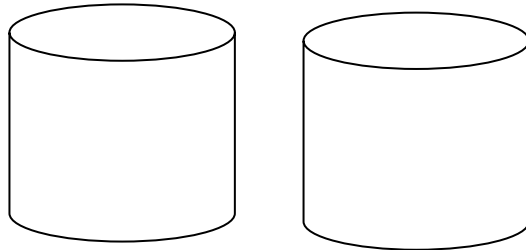


Answer :




3

Make equal groups by sharing.



Answer :



|   |  |  |
|---|--|--|
| 4 | <p>Find the correct answer.</p> <ul style="list-style-type: none"><li>❖ If some children share the same box of cakes, each child will get more/fewer cakes. <input type="text"/></li><li>❖ If more children share the same box of cakes, each child will get more/fewer cakes. <input type="text"/></li></ul> <p><b>Answer : More, Fewer</b></p> |  |
| 5 | <p>Sita gives 3 balls to Tomy, 4 balls to Geethu and 5 eggs to Sumesh. How many balls does she give her friends?</p> <p><b>Answer : 12</b></p>   |  |